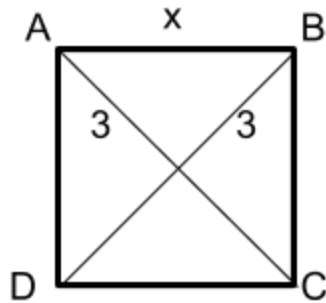
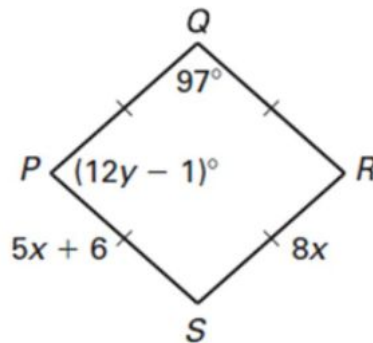
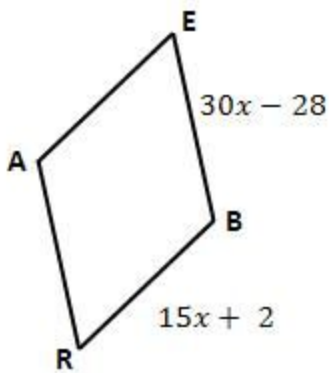


For what values of x are the following quadrilaterals squares?



For what values of x and y are the following quadrilaterals rhombuses?



For what values of x and y are the following quadrilaterals rectangles?

